

Date: 26th April, 2017

Time: 4.15 pm – 5.15 pm

Answer ALL Questions. Write the answers on the question paper itself.

- I. How do you distinguish “projects” and “day to day operations”, in an organization? Explain your answer by using a suitable example.

.....

.....

.....

.....

.....

- II. Describe the “Figure 1” completely.

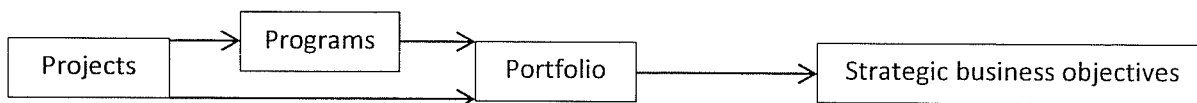


Figure 1

.....

.....

.....

.....

.....

.....

.....

.....

.....

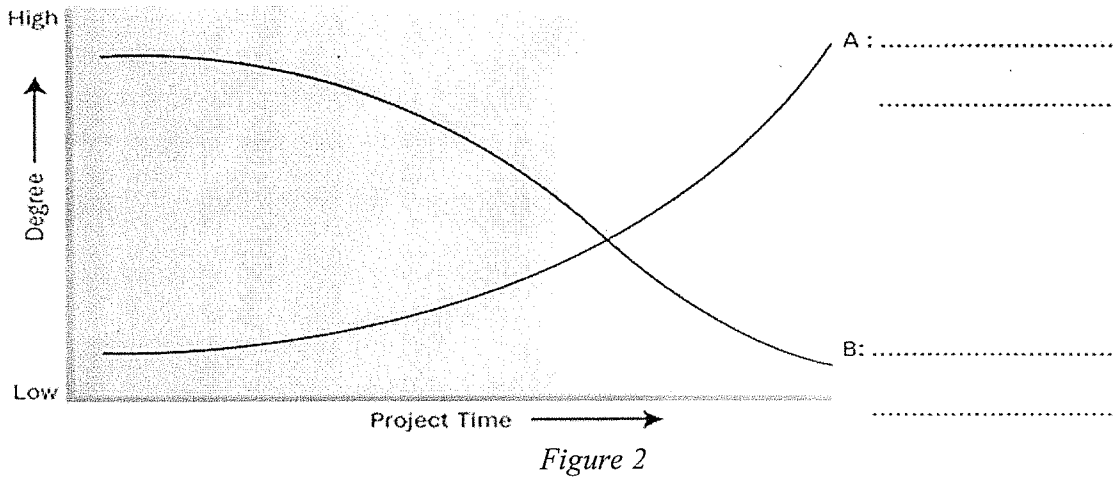
.....

- III. State the organizational process assets that are needed for effective project management.

.....

.....

IV. The "Figure 2" represents a graph relevant to project properties. Name line "A" and line "B" by identifying the project properties.



V. State the project management process groups in the correct order.

.....

.....

.....

VI. "Project phase is a project process group". Is this a correct statement? Give the reason/s for your answer.

.....

.....

.....

VII. What are the project management knowledge areas that are needed for "project planning"?

.....

.....

.....

VIII. What is the project management knowledge area that is needed to conduct all project management process groups?

.....

.....

.....

IX. Typically, organizations do not implement all the projects they identify. Why?

.....

.....

X.

a. "Figure 3" represents one of the project selection methods. Name it.

.....

b. What is/are the best project/s according to the given data?

.....

c. If there are two best projects, what is/are your suggestion/s to select only one project to implement,?

.....

.....

	Weight (%)	Project A	Project B	Project C	Project D
Criteria 1	25	80	65	84	98
Criteria 2	30	45	23	76	80
Criteria 3	15	60	84	25	60
Criteria 4	20	10	76	65	10
Criteria 5	10	20	20	20	30
	100	47	53	63	63

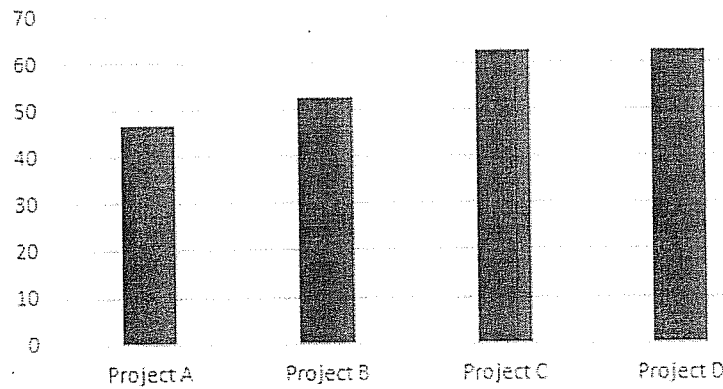


Figure 3